


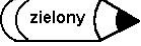




Oblicz i pomaluj wyniki działań zgodnie z objaśnieniami.

	}	$11+0 = \square$		}	$11-9 = \dots\dots\dots = \square$
		$18-9 = (18-8)-1 = 10-1 = \square$			$10-7 = \square$
		$12-6 = \dots\dots\dots = \square$			

	}	$8+9 = (8+2)+7 = 10+7 = \square$		}	$(7+3)+5 = \dots\dots\dots = \square$
		$13-5 = \dots\dots\dots = \square$			$(9+1)+4 = \dots\dots\dots = \square$
		$7-6 = \square$			$(6+4)+9 = \dots\dots\dots = \square$
					$(5+5)+3 = \dots\dots\dots = \square$
					$9+3 = \dots\dots\dots = \square$
		$9+7 = \dots\dots\dots = \square$			$(9+1)+8 = \dots\dots\dots = \square$
					$(2+8)+(5+5) = \dots\dots\dots = \square$

 $16-6 = \square$

 $14-7 = \dots\dots\dots = \square$

