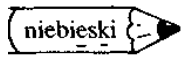



Oblicz i pomaluj wyniki działań zgodnie z objaśnieniami.



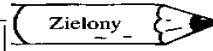
$$\begin{cases} 4 \cdot 1 = \square & 8 \cdot 1 = \square \\ 6 \cdot 1 = \square & 1 \cdot 10 = \square \end{cases}$$



$$\begin{cases} 1 \cdot 1 = \square & 2 \cdot 1 = \square \end{cases}$$



$$\begin{cases} 1 \cdot 3 = \square & 1 \cdot 5 = \square & 1 \cdot 7 = \square \end{cases}$$



$$0 \cdot 9 = \square$$

